

Write your name here

Surname					Other names				
Centre Number					Candidate Number				
<input type="text"/> <input type="text"/> <input type="text"/> <input type="text"/> <input type="text"/>					<input type="text"/> <input type="text"/> <input type="text"/> <input type="text"/> <input type="text"/>				

Edexcel GCE

Geography
Advanced Subsidiary
Unit 2: Geographical Investigations

Friday 21 January 2011 – Afternoon Time: 1 hour 15 minutes	Paper Reference 6GE02/01
----------------------------------------------------------------------	------------------------------------

You must have: Resource Booklet (enclosed)	Total Marks
------------------------------------------------------	-------------

Instructions

- Use **black** ink or ball-point pen.
- **Fill in the boxes** at the top of this page with your name, centre number and candidate number.
- Answer ONE question in Section A and ONE question in Section B.
- Answer the questions in the spaces provided
– *there may be more space than you need.*

Information

- The total mark for this paper is 70.
- The marks for **each** question are shown in brackets
– *use this as a guide as to how much time to spend on each question.*
- The quality of your written communication will be assessed in ALL your responses
– *you should take particular care with your spelling, punctuation and grammar, as well as the clarity of expression.*

Advice

- Read each question carefully before you start to answer it.
- Keep an eye on the time.
- Spend approximately 35 – 40 minutes on Section A and 35 – 40 minutes on Section B.
- Check your answers if you have time at the end.

Turn over ►

M38010A

©2011 Edexcel Limited.

1/1/1/1/1



edexcel 
 advancing learning, changing lives

(c) Describe the fieldwork and research you undertook to investigate the impacts of extreme weather.

(15)

Area with horizontal dotted lines for writing the answer.



Handwriting practice area with 30 horizontal dotted lines.

(Total for Question 1 = 35 marks)



(c) Describe the fieldwork and research you undertook to investigate coastal development over time.

(15)

Area with horizontal dotted lines for writing the answer.



Area with horizontal dotted lines for writing.

(Total for Question 2 = 35 marks)

TOTAL FOR SECTION A = 35 MARKS



Handwriting practice area with 30 horizontal dotted lines.

(Total for Question 3 = 35 marks)



(b) With reference to examples, discuss the role of the players involved in rebranding. (10)

A series of horizontal dotted lines for writing the answer.



Area with horizontal dotted lines for writing.

(Total for Question 4 = 35 marks)

**TOTAL FOR SECTION B = 35 MARKS
TOTAL FOR PAPER = 70 MARKS**



Edexcel GCE

Geography

Advanced Subsidiary

Unit 2: Geographical Investigations

Resource Booklet

Friday 21 January 2011 – Afternoon

Paper Reference

6GE02/01

Do not return this Resource Booklet with the question paper.

Turn over ►

M38010A





©2011 Edexcel Limited.

1/1/1/1/1/1



edexcel 
advancing learning, changing lives

Figure 1 Number of extreme weather events reported in the Sheffield Star (UK) 1997–2008

Years	Number of reported extreme events			
	Flooding	Freezing	Strong winds	Heat or Drought
				
1997–1999	2	0	1	1
2000–2002	3	4	3	1
2003–2005	2	3	2	1
2006–2008	5	2	3	3

These events were reported in the Sheffield Star newspaper 1997–2008

Figure 2 Coastline changes along the East Yorkshire coastline over the past 2,000 years

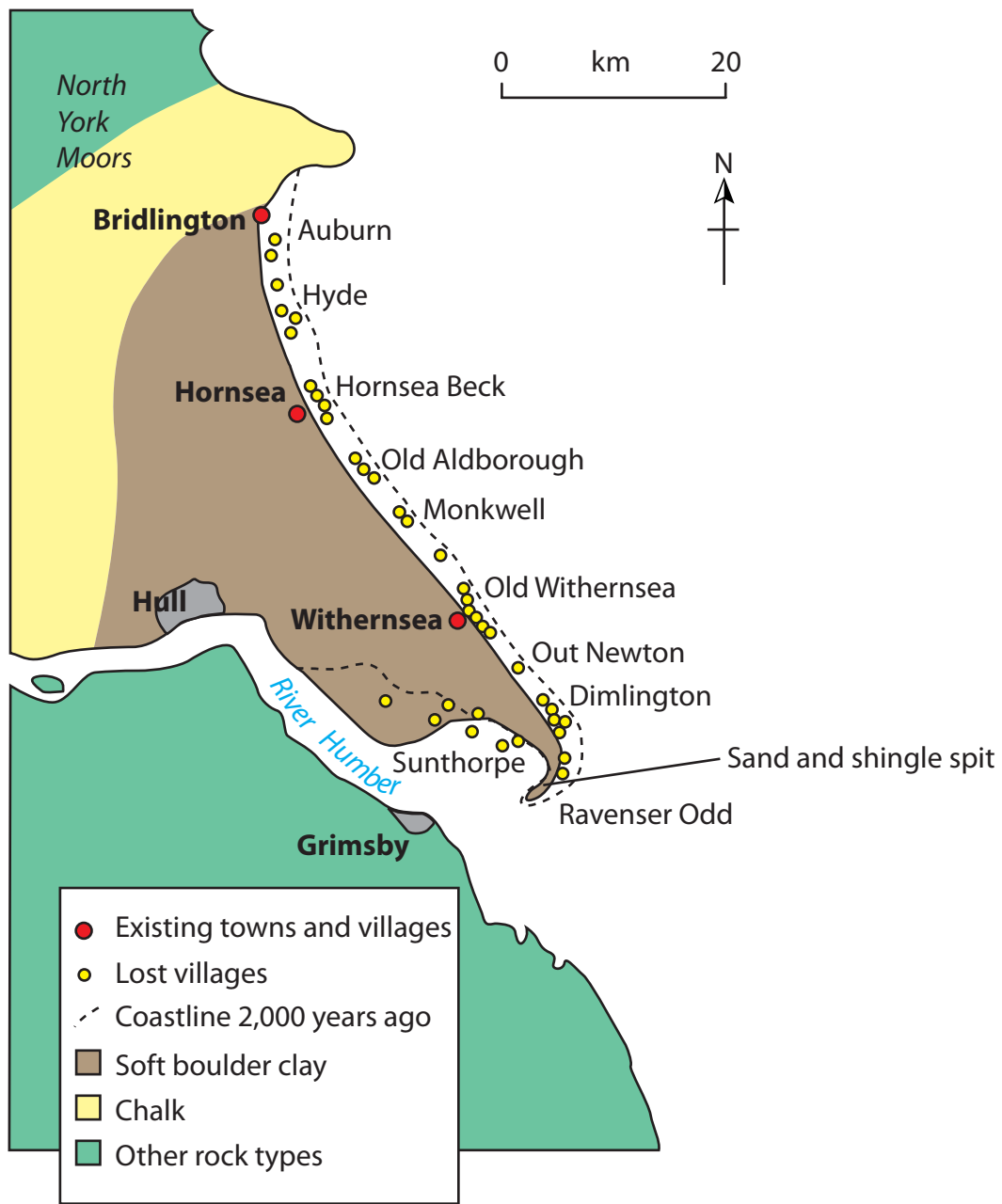
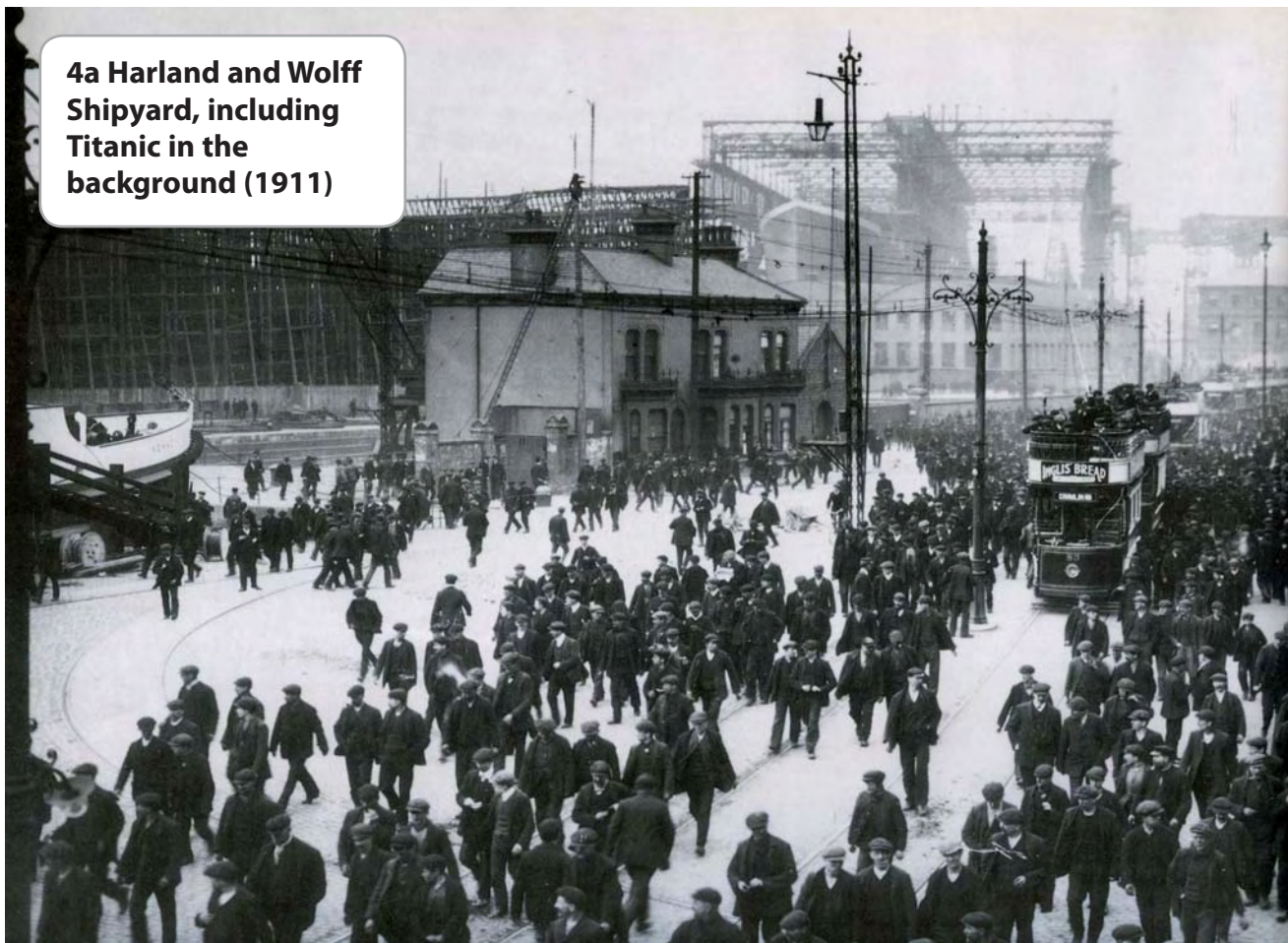


Figure 3 Example of a student's recording sheet to explore inequality in an urban area

Category	Positive evaluation	+2	+1	-1	-2	Negative evaluation
<i>Building design and layout</i>	Attractive					Drab and uninteresting; colourless
<i>Parks and natural features</i>	Greenery; open space and recreation areas					No spaces; poorly maintained
<i>Pavements</i>	Highly maintained					Poor maintenance and uneven
<i>Street furniture</i>	Aesthetically well designed; high quality materials					Poor design, low-grade materials – won't last

Figure 4 Two images of Belfast, Northern Ireland

4a Harland and Wolff Shipyard, including Titanic in the background (1911)



4b Belfast: Titanic Quarter and 'Allen's Tours' (2009)

