

Write your name here

Surname					Other names				
Centre Number					Candidate Number				
<input type="text"/> <input type="text"/> <input type="text"/> <input type="text"/> <input type="text"/>					<input type="text"/> <input type="text"/> <input type="text"/> <input type="text"/> <input type="text"/>				

**Edexcel GCE**

**Geography**  
**Advanced Subsidiary**  
**Unit 2: Geographical Investigations**

Tuesday 24 May 2011 – Afternoon <b>Time: 1 hour 15 minutes</b>	Paper Reference <b>6GE02/01</b>
---	------------------------------------

<b>You must have:</b> Resource Booklet (enclosed)	Total Marks
--	-------------

### Instructions

- Use **black** ink or ball-point pen.
- **Fill in the boxes** at the top of this page with your name, centre number and candidate number.
- Answer ONE question in Section A and ONE question in Section B.
- Answer the questions in the spaces provided  
– *there may be more space than you need.*

### Information

- The total mark for this paper is 70.
- The marks for **each** question are shown in brackets  
– *use this as a guide as to how much time to spend on each question.*
- The quality of your written communication will be assessed in ALL your responses  
– *you should take particular care with your spelling, punctuation and grammar, as well as the clarity of expression.*

### Advice

- Read each question carefully before you start to answer it.
- Keep an eye on the time.
- Spend approximately 35 – 40 minutes on Section A and 35 – 40 minutes on Section B.
- Check your answers if you have time at the end.

Turn over ►

P38855A

©2011 Edexcel Limited.

1/1/1/1



**edexcel**   
 advancing learning, changing lives



(b) Describe the fieldwork and research you undertook to investigate flood risk.

(15)

Area with horizontal dotted lines for writing the answer.



(c) Using examples, explain how different strategies can be used to manage the impacts of drought.

(10)

A series of horizontal dotted lines for writing the answer.



Handwriting practice area with 20 horizontal dotted lines.

**(Total for Question 1 = 35 marks)**







(c) Using examples, explain how coastal development can lead to environmental costs. (10)

A series of horizontal dotted lines for writing the answer.



Area with horizontal dotted lines for writing.

**(Total for Question 2 = 35 marks)**

**TOTAL FOR SECTION A = 35 MARKS**







(c) Using examples, explain why inequalities are difficult to manage.

(10)

A series of horizontal dotted lines for writing the answer.



Area with horizontal dotted lines for writing.

**(Total for Question 3 = 35 marks)**







(c) Using examples, explain why rebranding strategies are not always entirely successful.

(10)

A series of horizontal dotted lines for writing the answer.



Area with horizontal dotted lines for writing.

**(Total for Question 4 = 35 marks)**

**TOTAL FOR SECTION B = 35 MARKS**  
**TOTAL FOR PAPER = 70 MARKS**



**Edexcel GCE**

# Geography

**Advanced Subsidiary**

**Unit 2: Geographical Investigations**

**Resource Booklet**

Tuesday 24 May 2011 – Afternoon

Paper Reference

**6GE02/01**

**Do not return this Resource Booklet with the question paper.**

*Turn over* ►

**P38855A**

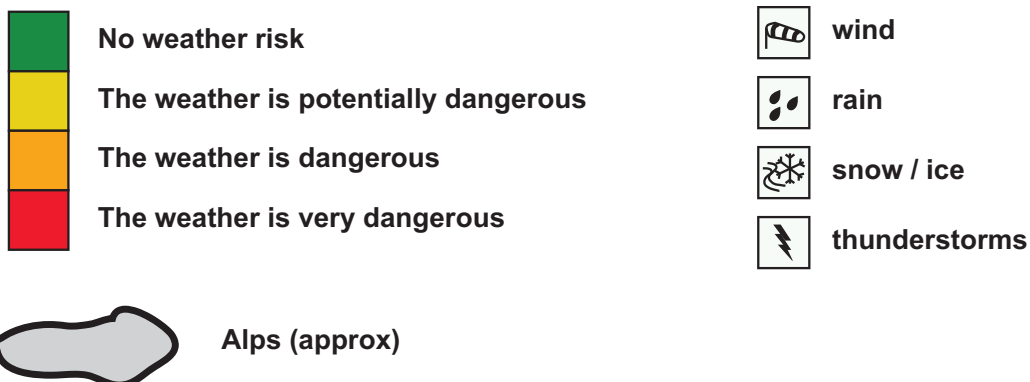
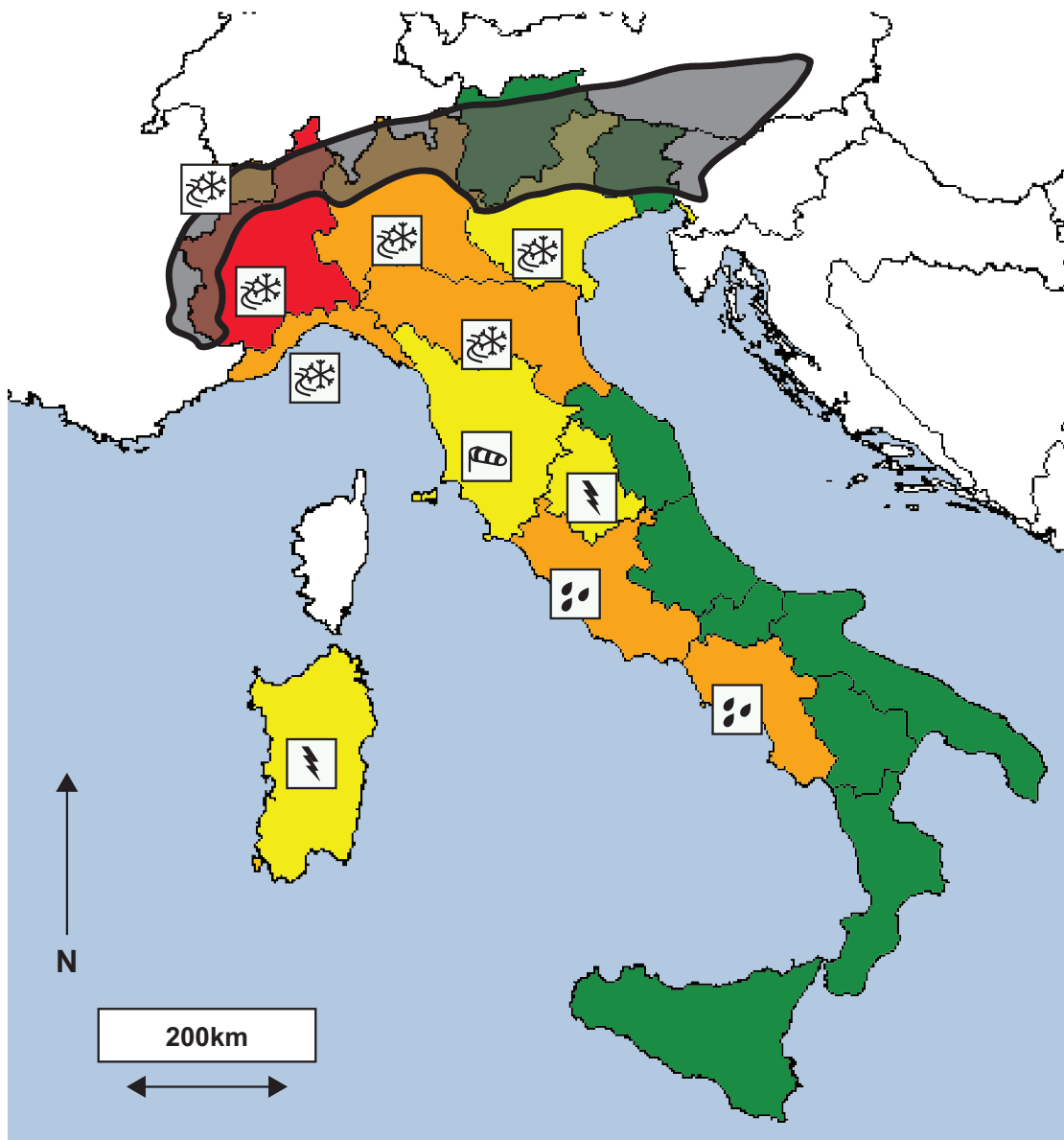
©2011 Edexcel Limited.

1/1/1/1



**edexcel**   
advancing learning, changing lives

Figure 1 Type and severity of extreme weather in Italy, 7 January 2009



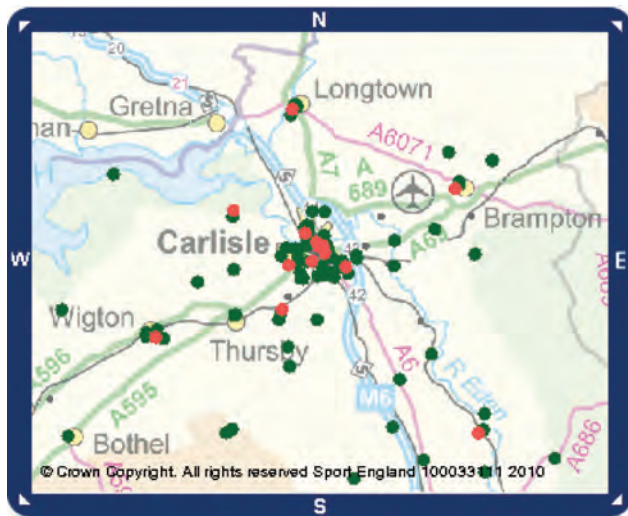
**Figure 2a Milford Haven Liquid Natural Gas (LNG) Terminal, Pembrokeshire, Wales**



**Figure 2b Miami coastal strip, USA**

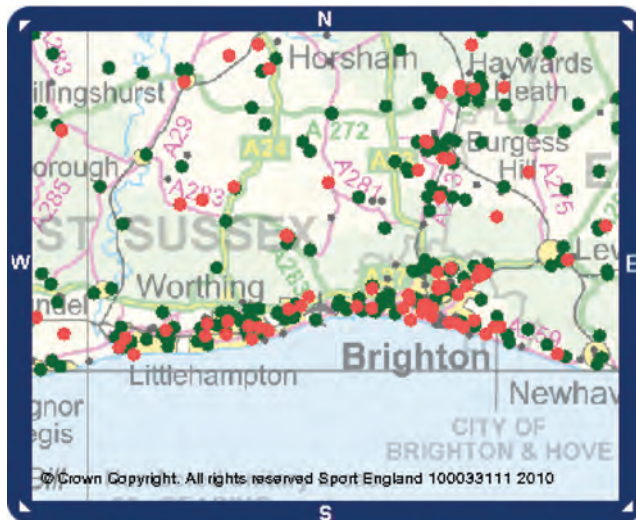


**Figure 3 Two GIS (Geographical Information Systems) maps showing the distribution of grass pitches and sports halls in two areas of England**



- Grass Pitches
- Sports Halls

10 km



- Grass Pitches
- Sports Halls

10 km

Source: ActivePlaces <http://www.activeplaces.com/>

**Figure 4** Possible rural rebranding strategies

