

Cambridge
International
AS & A Level

Cambridge International Examinations
Cambridge International Advanced Subsidiary and Advanced Level

GEOGRAPHY

9696/13

Paper 1 Core Geography

May/June 2017

INSERT

3 hours

READ THESE INSTRUCTIONS FIRST

This Insert contains all the Figures, Photographs and the Table referred to in the questions.

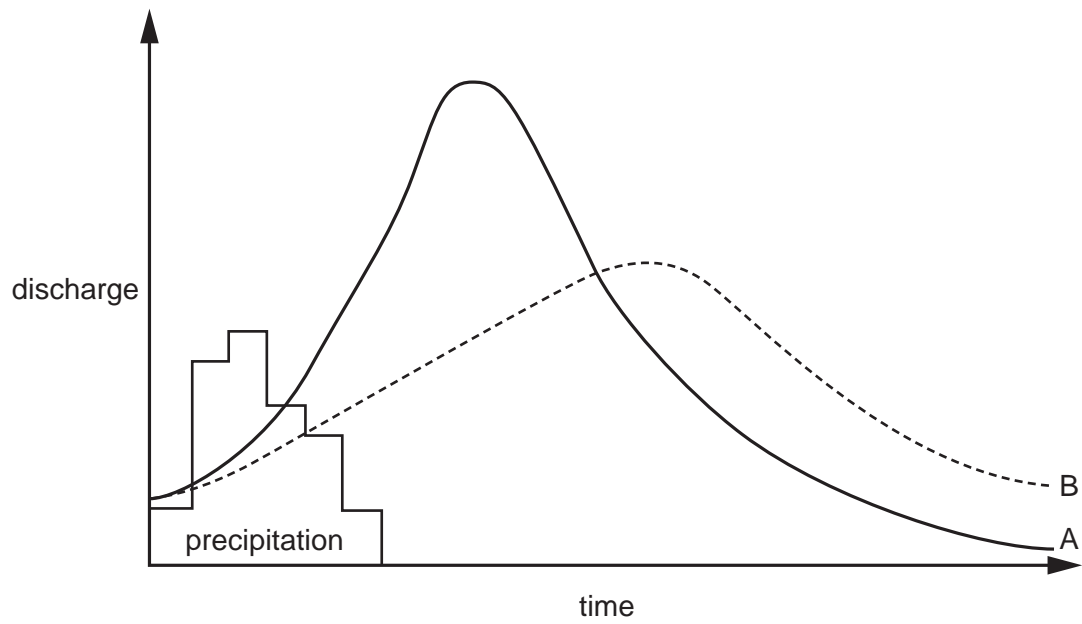


This document consists of **7** printed pages and **1** blank page.

2

Fig. 1 for Question 1

Two storm hydrographs from the same rainfall event

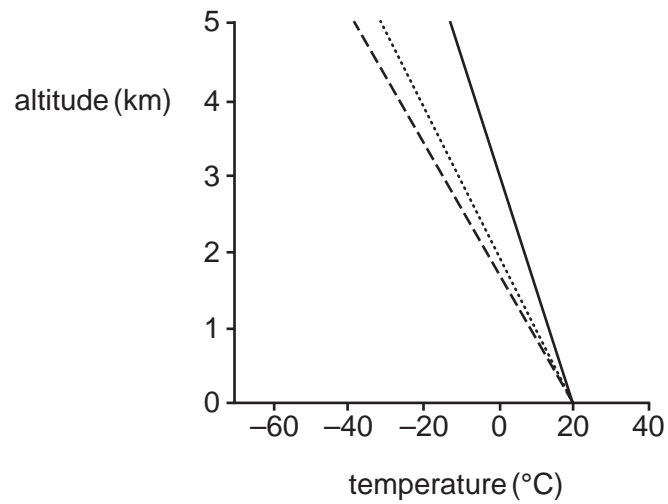
**Key**

- A = impermeable surface
- B = permeable surface

3

Fig. 2 for Question 2

Atmospheric lapse rates

**Key**

- Environmental Lapse Rate (ELR)
- Dry Adiabatic Lapse Rate (DALR)
- Saturated Adiabatic Lapse Rate (SALR)

4

Photograph A for Question 3**A mass movement**

Fig. 3 for Question 4

Life expectancy and GDP per person, 1950, 1980 and 2012

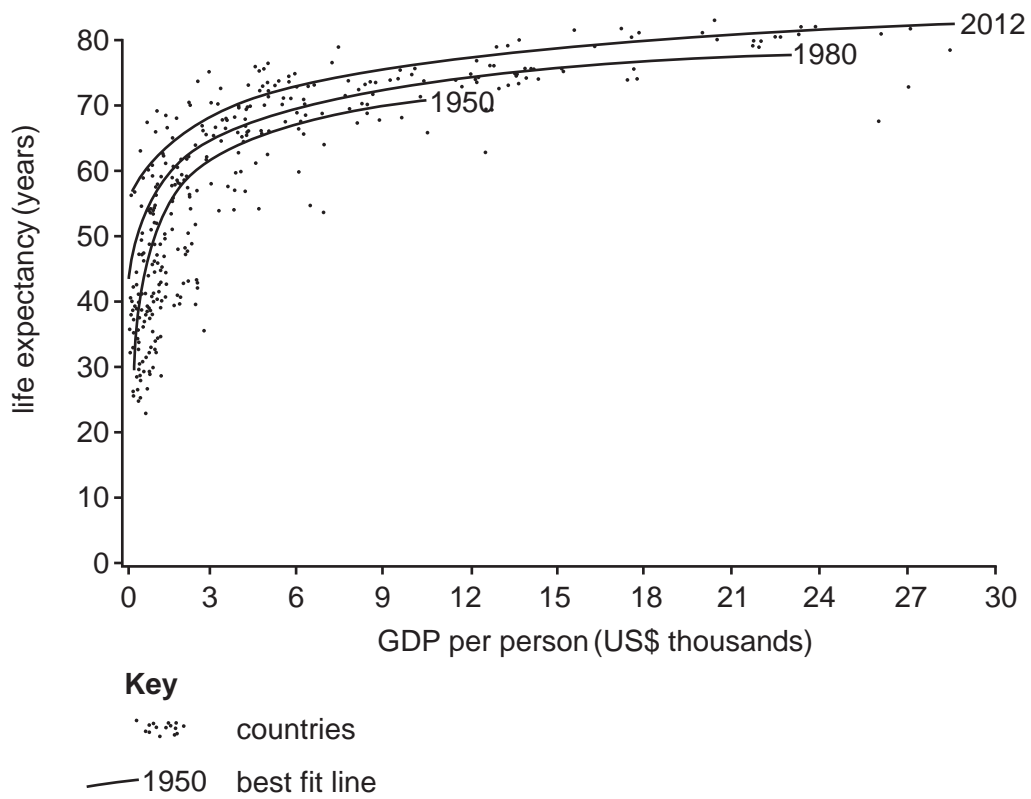


Table 1 for Question 5

The top 10 countries of origin and destination for international migrants, 2010

Top 10 countries of origin <i>For all migrants</i>		Top 10 destination countries <i>For all migrants</i>	
Mexico	12 930 000	USA	42 810 000
India	11 810 000	Russia	12 270 000
Russia	11 260 000	Germany	10 760 000
China	8 440 000	Saudi Arabia	7 290 000
Bangladesh	6 480 000	Canada	7 200 000
Ukraine	6 450 000	France	6 680 000
Palestinian territories	5 740 000	UK	6 450 000
UK	5 010 000	Spain	6 380 000
Philippines	4 630 000	India	5 440 000
Pakistan	4 480 000	Ukraine	5 260 000

Photograph B for Question 6

Part of the city of Bangkok, Thailand, an LEDC in Asia in 2015



BLANK PAGE

Permission to reproduce items where third-party owned material protected by copyright is included has been sought and cleared where possible. Every reasonable effort has been made by the publisher (UCLES) to trace copyright holders, but if any items requiring clearance have unwittingly been included, the publisher will be pleased to make amends at the earliest possible opportunity.

To avoid the issue of disclosure of answer-related information to candidates, all copyright acknowledgements are reproduced online in the Cambridge International Examinations Copyright Acknowledgements Booklet. This is produced for each series of examinations and is freely available to download at www.cie.org.uk after the live examination series.

Cambridge International Examinations is part of the Cambridge Assessment Group. Cambridge Assessment is the brand name of University of Cambridge Local Examinations Syndicate (UCLES), which is itself a department of the University of Cambridge.