



UNIVERSITY OF CAMBRIDGE INTERNATIONAL EXAMINATIONS
General Certificate of Education Advanced Subsidiary Level and Advanced Level

GEOGRAPHY

9696/12

Paper 1 Core Geography

October/November 2010

INSERT

3 hours

READ THESE INSTRUCTIONS FIRST

This Insert contains the Table, the Photograph and all the Figures referred to in the questions.

This document consists of **8** printed pages.

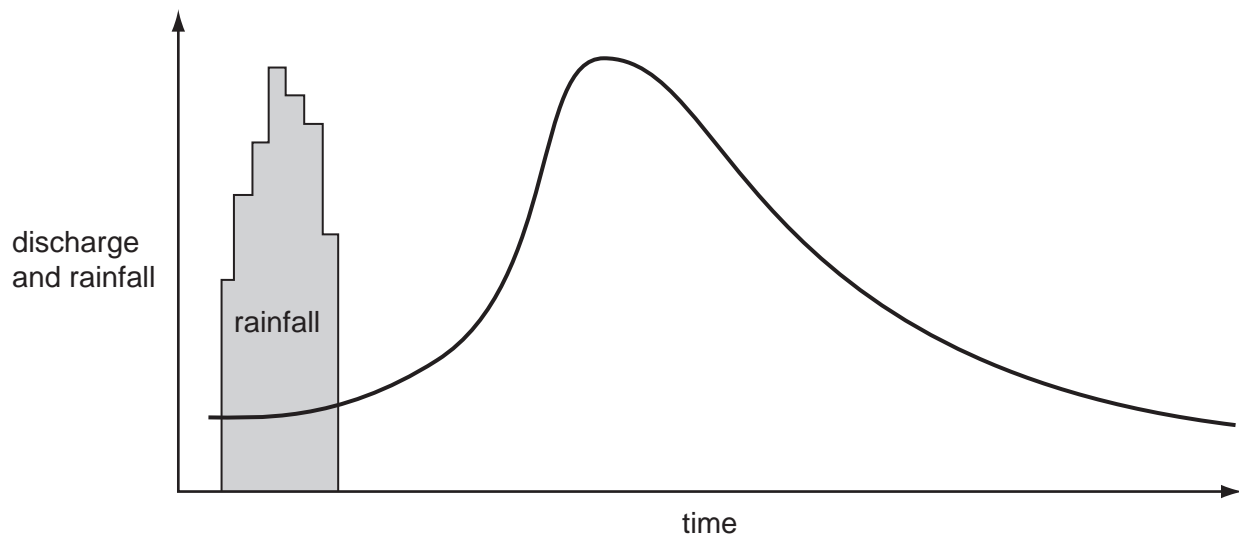


CANDIDATE NAME

CENTRE NUMBER

CANDIDATE NUMBER

Fig. 1 for Question 1
A storm hydrograph



If you have answered Question 1, attach this page to your Answer Booklet/Paper at the end of the examination.

Fig. 2 for Question 2

Night time temperatures across a city



Key




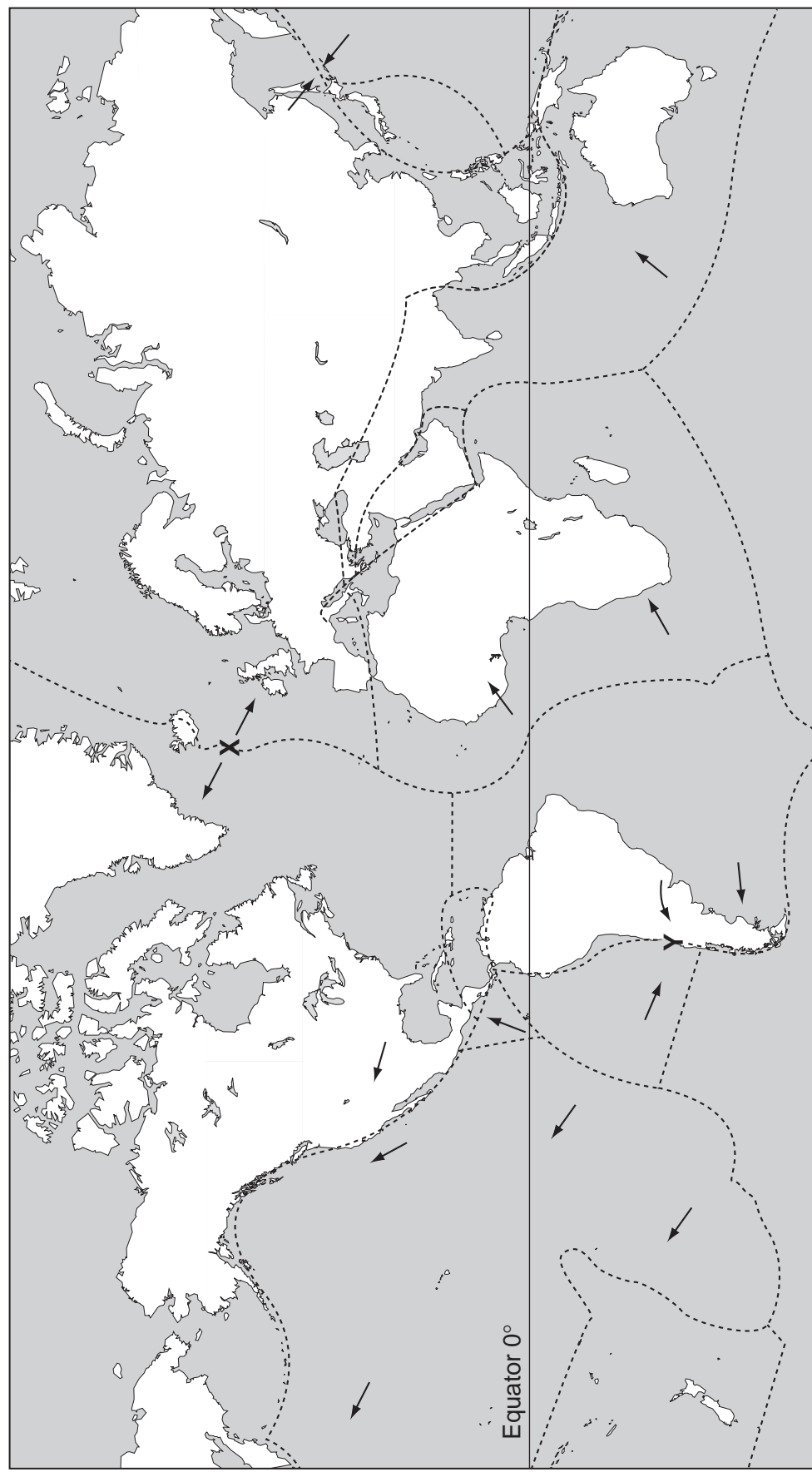
-  built up area
-  6°C isotherms
-  water

Fig. 3 for Question 3
The global distribution of tectonic plates



Key
----- plate margins
→ direction of movement

Table 1 for Question 4

Selected population statistics for Mali, an LEDC in Africa, and Italy, an MEDC in Europe, 2005

	Mali (LEDC)	Italy (MEDC)
birth rate (per 1000)	49	8.3
death rate (per 1000)	16	8.5
natural increase rate (per 1000)	N	-0.2
total fertility rate	7.3	1.3
age structure:		
% aged 0–14	47	14
% aged 15–64	50	47
% aged 65 and over	3	39

Fig. 4 for Question 5

Changes in the urban and rural populations, China, 1950–2030

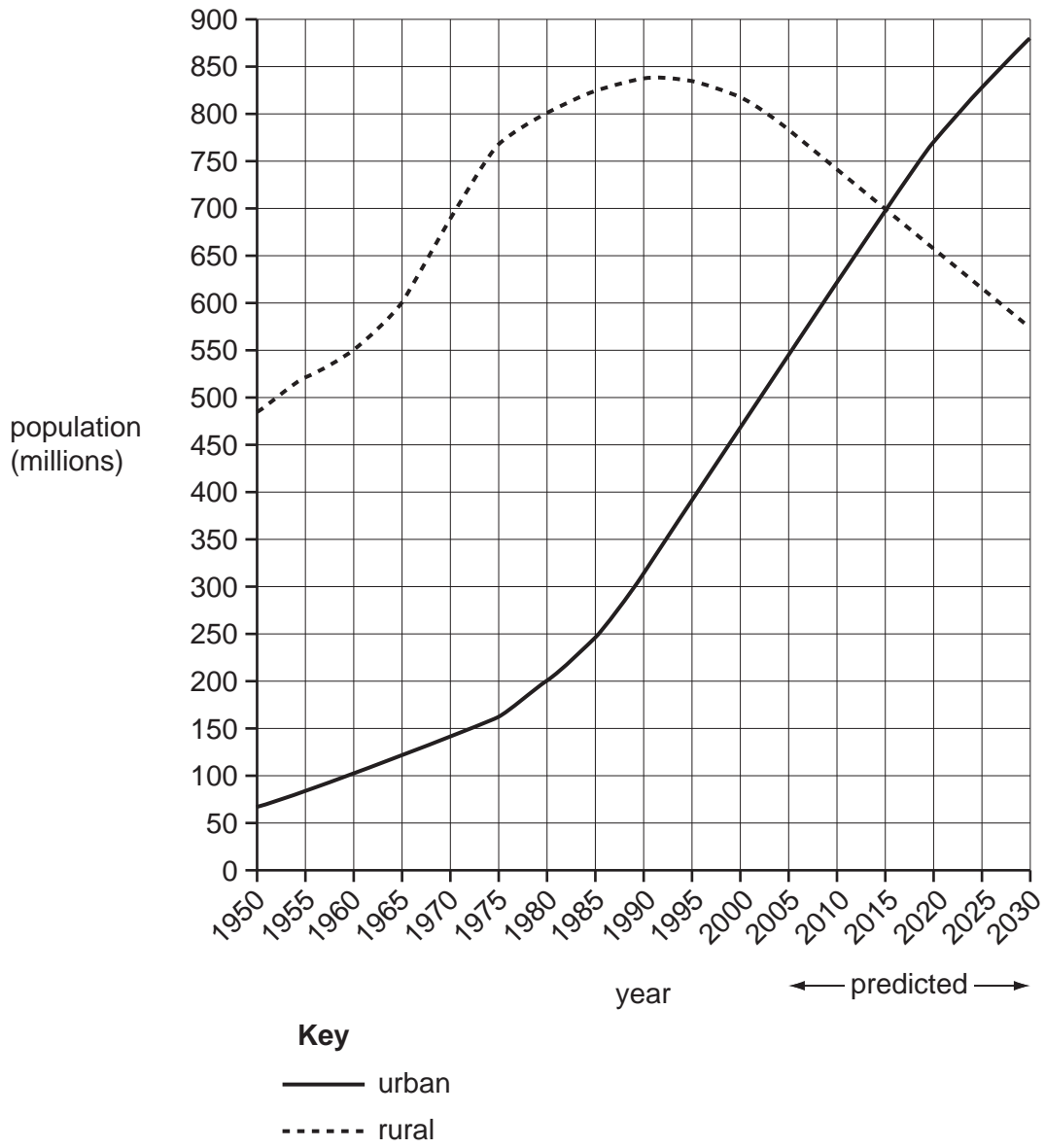
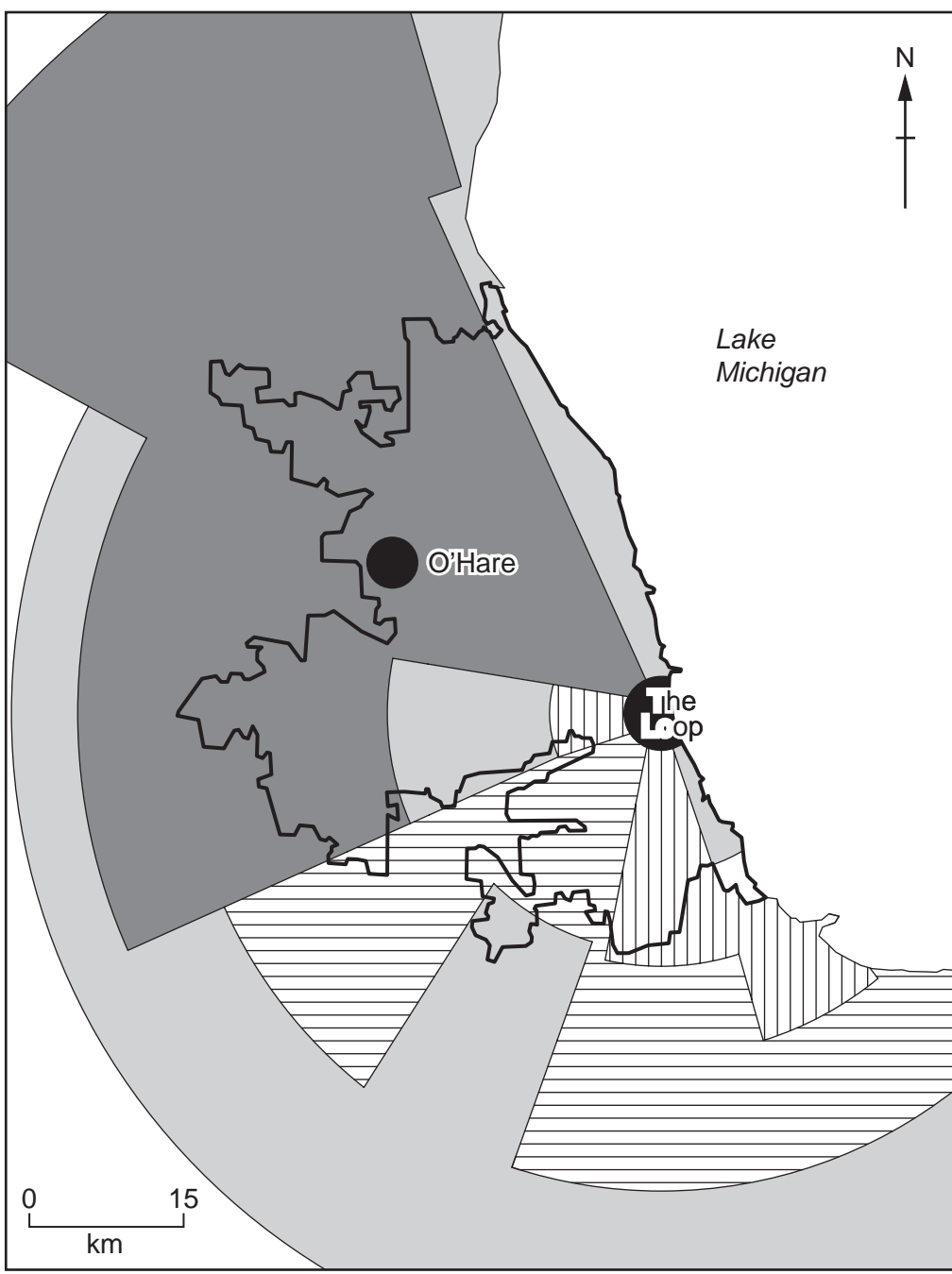








Fig. 5 for Question 6

Settlement dynamics in Chicago and its region, USA, 2005



Key

-  core areas
-  decline
-  no change
-  slow growth
-  expansion growth
-  city boundary

Photograph A for Question 12**A shanty town in Manila, Philippines, an LEDC in Asia**

Permission to reproduce items where third-party owned material protected by copyright is included has been sought and cleared where possible. Every reasonable effort has been made by the publisher (UCLES) to trace copyright holders, but if any items requiring clearance have unwittingly been included, the publisher will be pleased to make amends at the earliest possible opportunity.

University of Cambridge International Examinations is part of the Cambridge Assessment Group. Cambridge Assessment is the brand name of University of Cambridge Local Examinations Syndicate (UCLES), which is itself a department of the University of Cambridge.