



**Cambridge International Examinations**  
Cambridge International Advanced Subsidiary and Advanced Level

**GEOGRAPHY**

**9696/11**

Paper 1 Core Geography

**October/November 2016**

INSERT

**3 hours**

**READ THESE INSTRUCTIONS FIRST**

This Insert contains the Photograph, Table and all the Figures referred to in the questions.



This document consists of **7** printed pages and **1** blank page.

2

Photograph A for Question 1

A meandering river



Table 1 for Question 2

Daily energy balance for a rural area and an urban area

<b>energy balance (kwh/m<sup>2</sup>/day)</b>	<b>rural area</b>	<b>urban area</b>
incoming solar radiation	7.6	7.6
reflected solar radiation	1.9	0.4
outgoing long wave earth radiation	8.5	10.3
latent heat transfer	2.0	1.0
sensible heat transfer	0.8	0.8
storage heat	0.3	1.3
heat from human activity	0.1	0.8

Fig. 1 for Question 3

Some features associated with the movement of tectonic plates

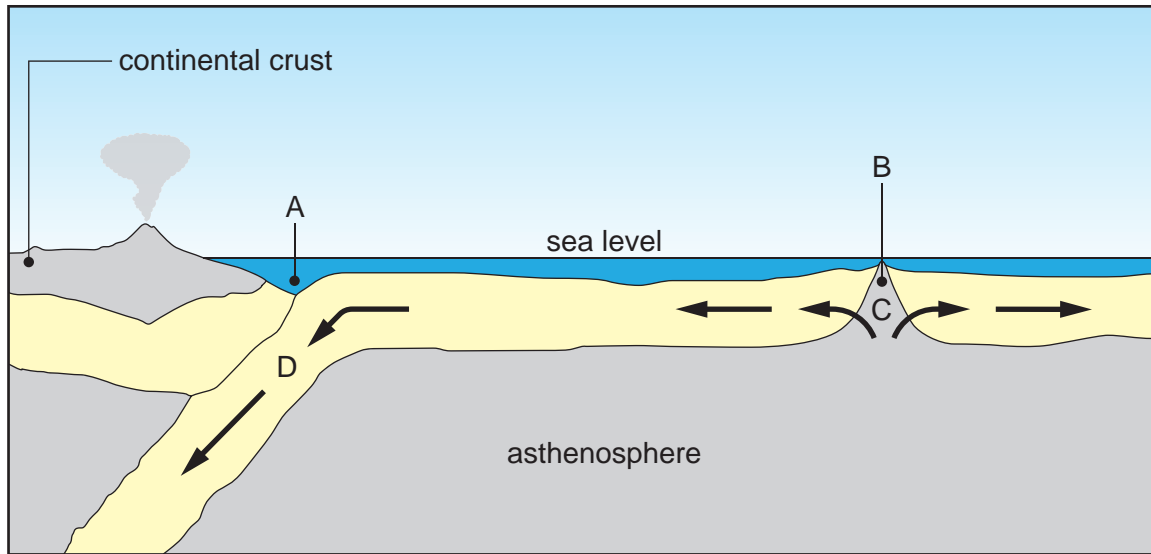
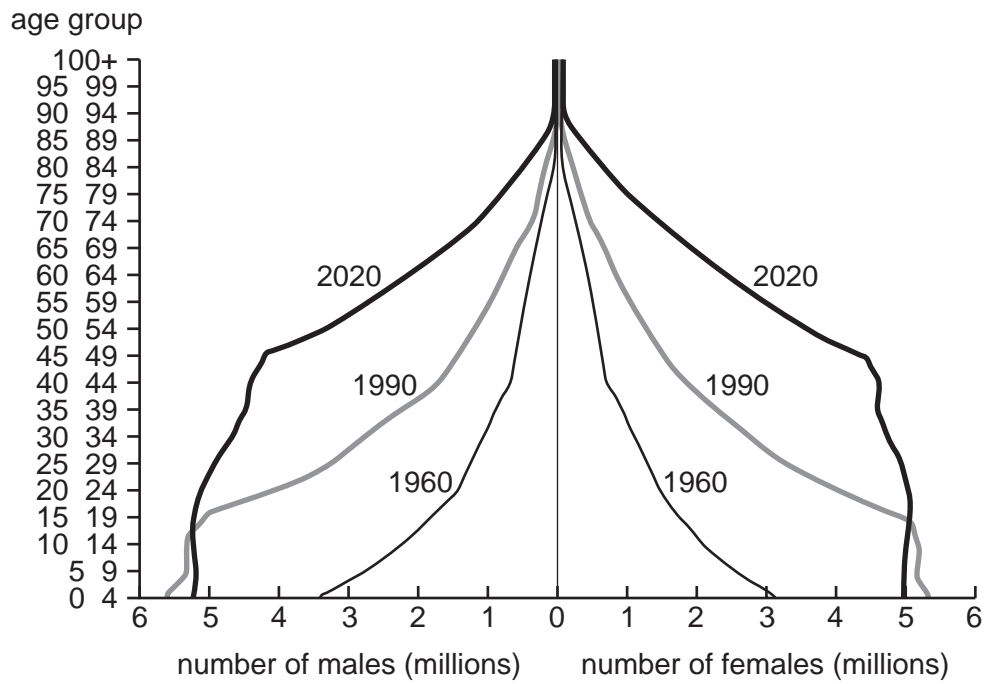


Fig. 2 for Question 4

Age/sex pyramids for Mexico, an LEDC in North America, in 1960 and 1990 and predicted for 2020



6

Fig. 3 for Question 5

Population change in the UK, an MEDC in Europe, by natural increase and net migration, 1978–2007

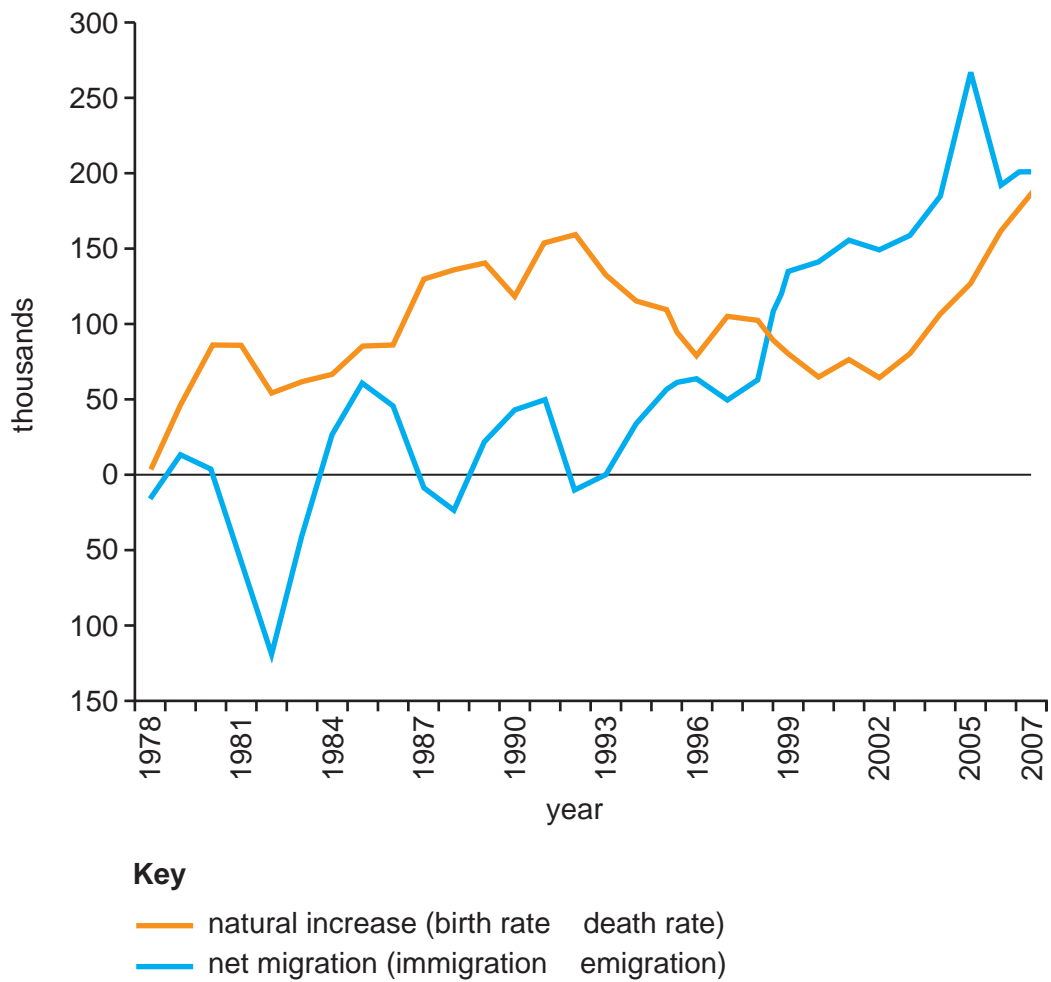
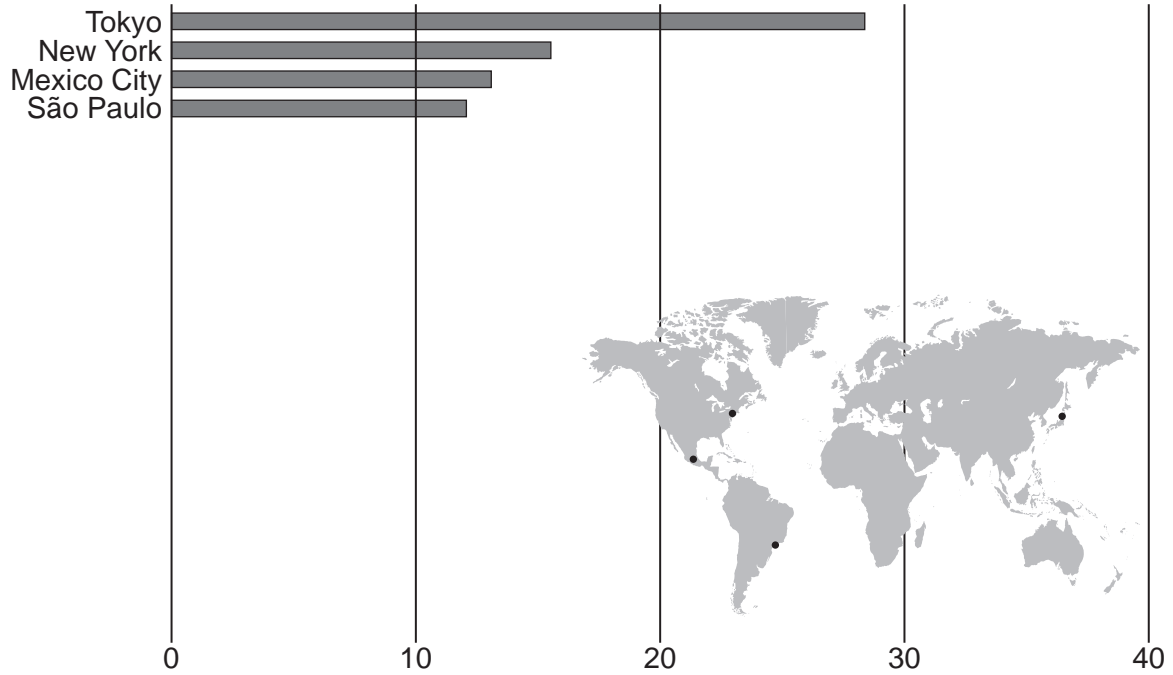


Fig. 4 for Question 6

Cities with over 10 million people in 1980 and 2010

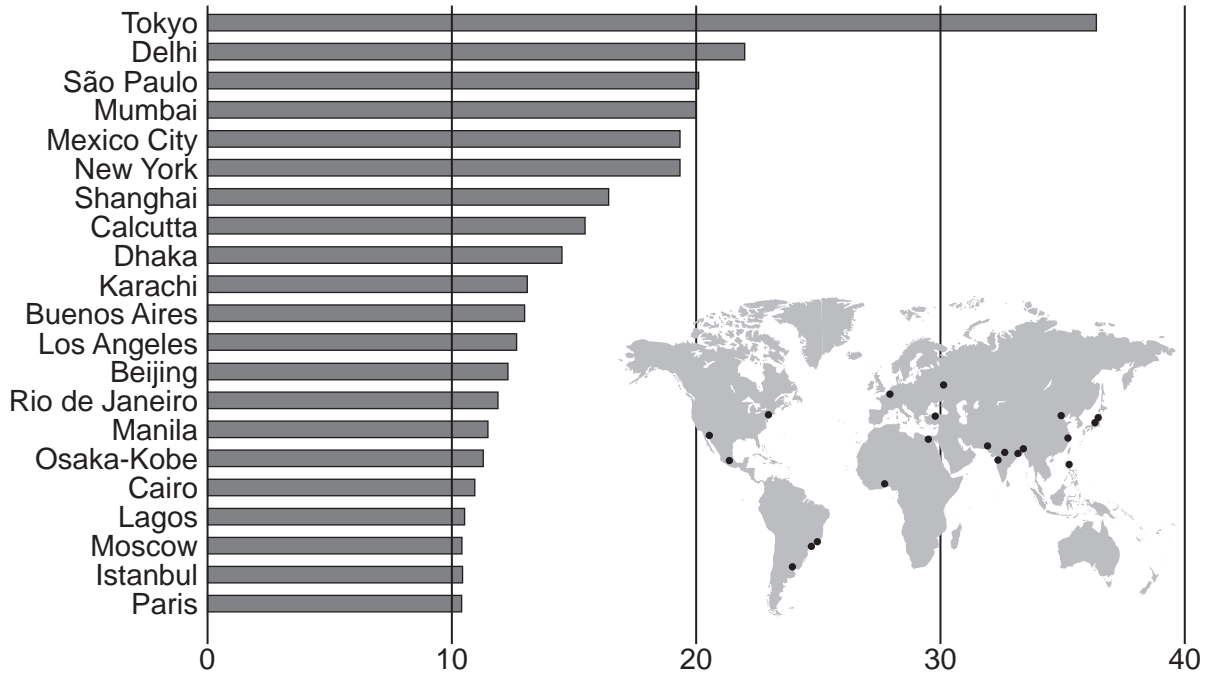
1980

Population (millions)



2010

Population (millions)



**BLANK PAGE**

---

Permission to reproduce items where third party owned material protected by copyright is included has been sought and cleared where possible. Every reasonable effort has been made by the publisher (UCLES) to trace copyright holders, but if any items requiring clearance have unwittingly been included, the publisher will be pleased to make amends at the earliest possible opportunity.

To avoid the issue of disclosure of answer related information to candidates, all copyright acknowledgements are reproduced online in the Cambridge International Examinations Copyright Acknowledgements Booklet. This is produced for each series of examinations and is freely available to download at [www.cie.org.uk](http://www.cie.org.uk) after the live examination series.

Cambridge International Examinations is part of the Cambridge Assessment Group. Cambridge Assessment is the brand name of University of Cambridge Local Examinations Syndicate (UCLES), which is itself a department of the University of Cambridge.