

# **GCSE (9–1) Geography B**

## **(Geography for Enquiring Minds)**

### **J384/02 People and Society**

#### **Sample Resource Booklet**

Time allowed: 1 hour 15 minutes

#### **INFORMATION FOR CANDIDATES**

- The questions tell you which resources you need to use.
- This document consists of **8** pages. Any blank pages are indicated.

#### **INSTRUCTION TO EXAMS OFFICER/INVIGILATOR**

- Do not send this Resource Booklet for marking, it should be retained in the centre or recycled. Please contact OCR Copyright should you wish to re-use this document.

#### **CONTENTS OF RESOURCE BOOKLET**

- Fig. 1 – The Three Gorges Dam, China
- Fig. 2a – Maps of the UK showing relief
- Fig. 2b – Map of the UK showing population density
- Fig. 3 – A graph from a data presentation part of a human geography fieldwork investigation

**BLANK PAGE**

SPECIMEN

**Fig. 1 – The Three Gorges Dam, China**



The Chinese government spent a total of \$6 billion building the Three Gorges Dam, which took 15 years to build.

SPECIMEN

Fig. 2a – Map of the UK showing relief

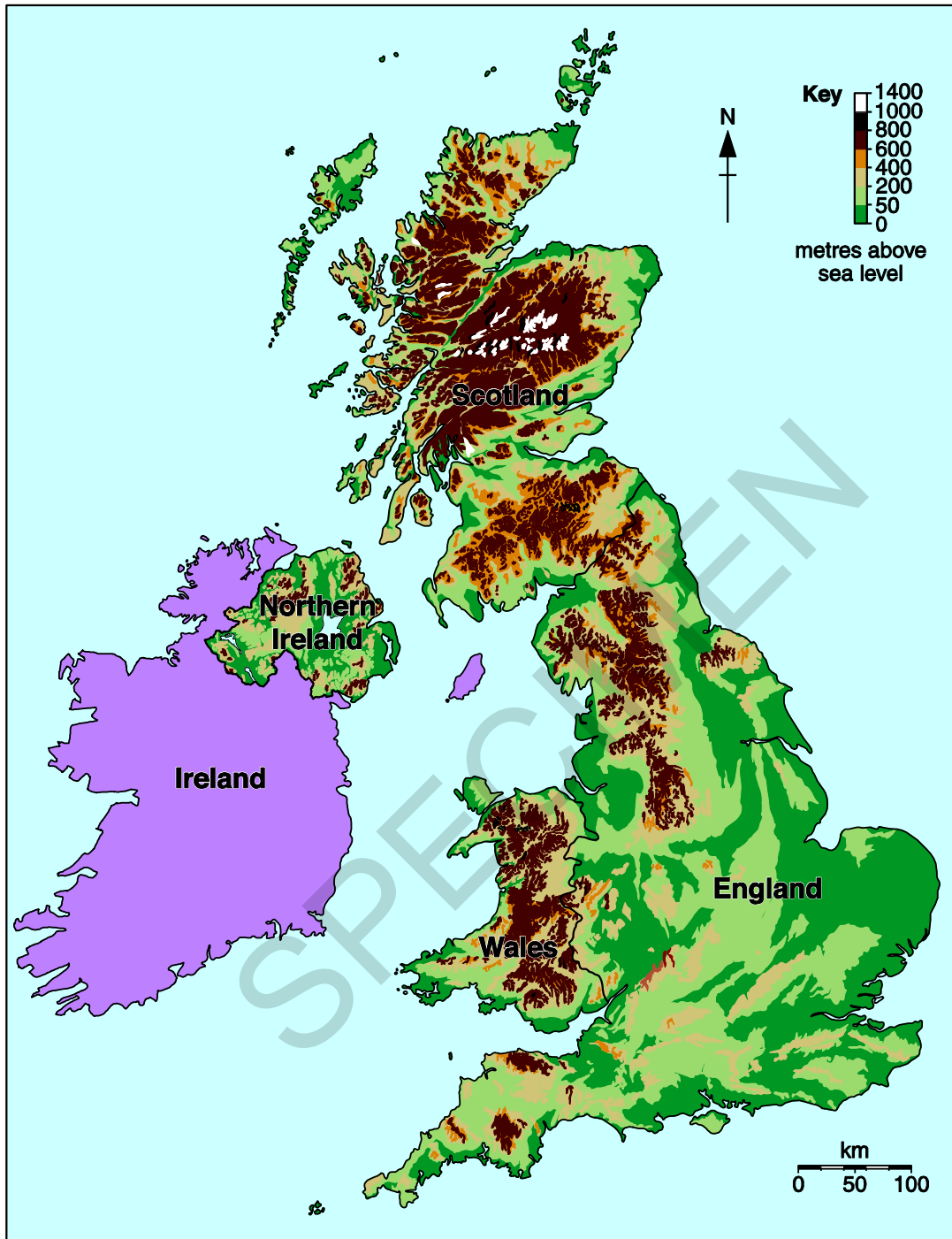


Fig. 2b – Map of the UK showing population density

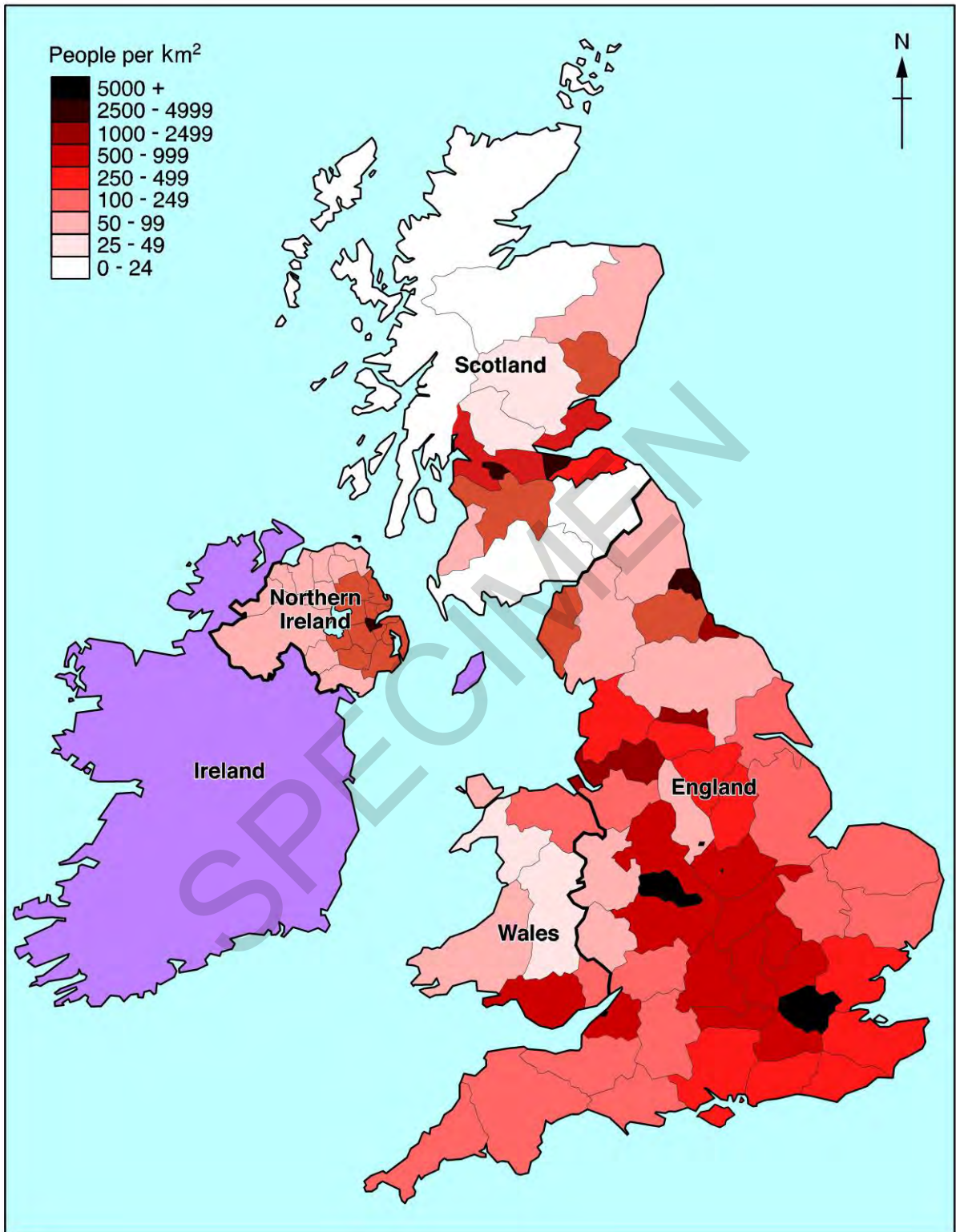
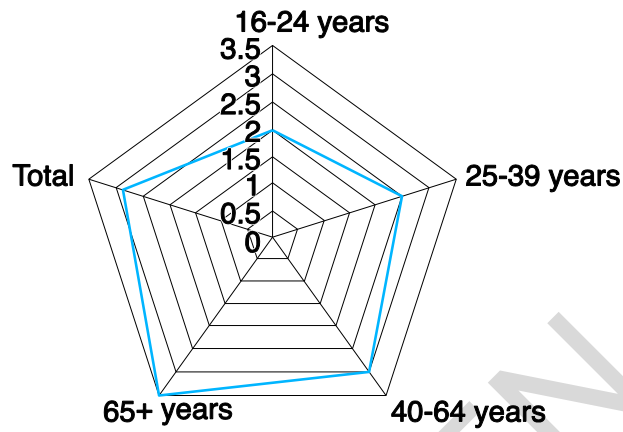


Fig. 3 – A graph from a data presentation part of a human geography fieldwork investigation

Average score out of 5 given to the question  
'To what extent have you been affected by shop  
closures in Worthing?'



SPECIMEN

**BLANK PAGE**

SPECIMEN

**BLANK PAGE**

SPECIMEN

---

**Copyright Information:**

Fig. 1: Image of Three Gorges Dam in China © Prill Mediendesign & Fotografie. Image supplied by iStock, [www.istockphoto.com](http://www.istockphoto.com)

OCR is committed to seeking permission to reproduce all third-party content that it uses in the assessment materials. OCR has attempted to identify and contact all copyright holders whose work is used in this paper. To avoid the issue of disclosure of answer-related information to candidates, all copyright acknowledgements are reproduced in the OCR Copyright Acknowledgements booklet. This is produced for each series of examinations and is freely available to download from our public website ([www.ocr.org.uk](http://www.ocr.org.uk)) after the live examination series.

If OCR has unwittingly failed to correctly acknowledge or clear any third-party content in this assessment material, OCR will be happy to correct its mistake at the earliest possible opportunity.

For queries or further information please contact the Copyright Team, First Floor, 9 Hills Road, Cambridge CB2 1GE.

OCR is part of the Cambridge Assessment Group; Cambridge Assessment is the brand name of University of Cambridge Local Examinations Syndicate (UCLES), which is itself a department of the University of Cambridge.